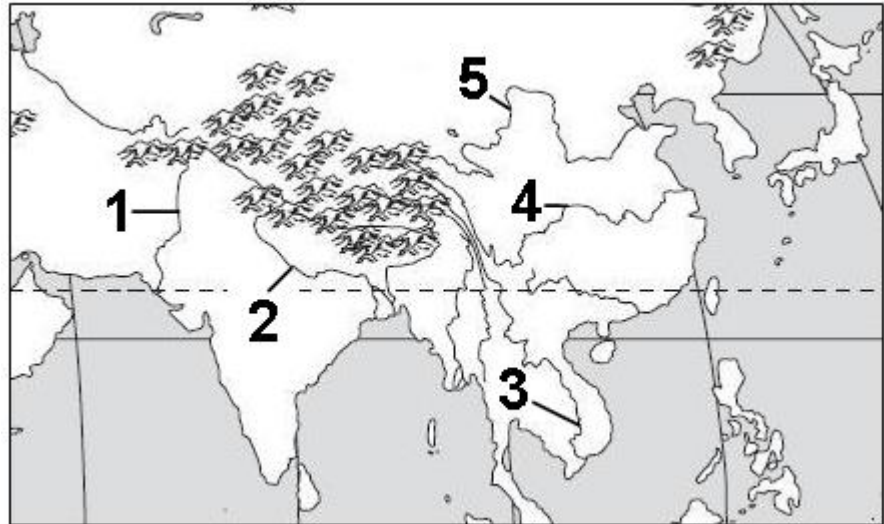
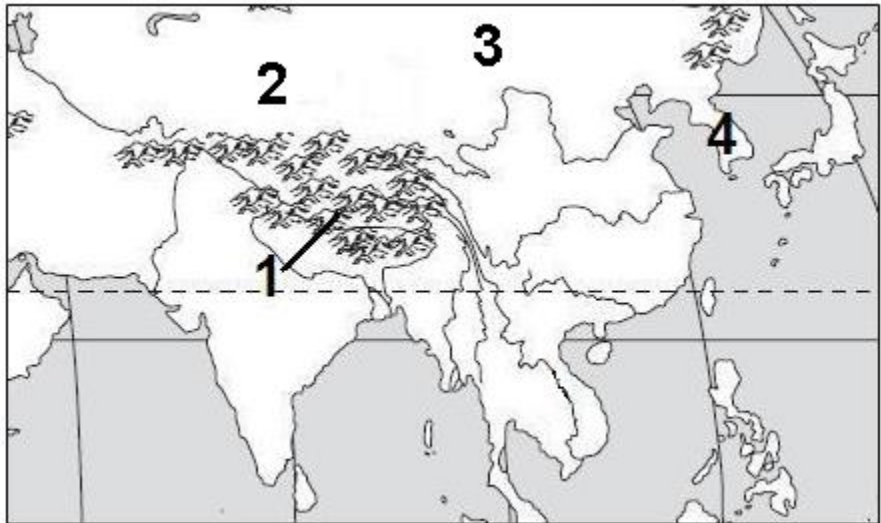


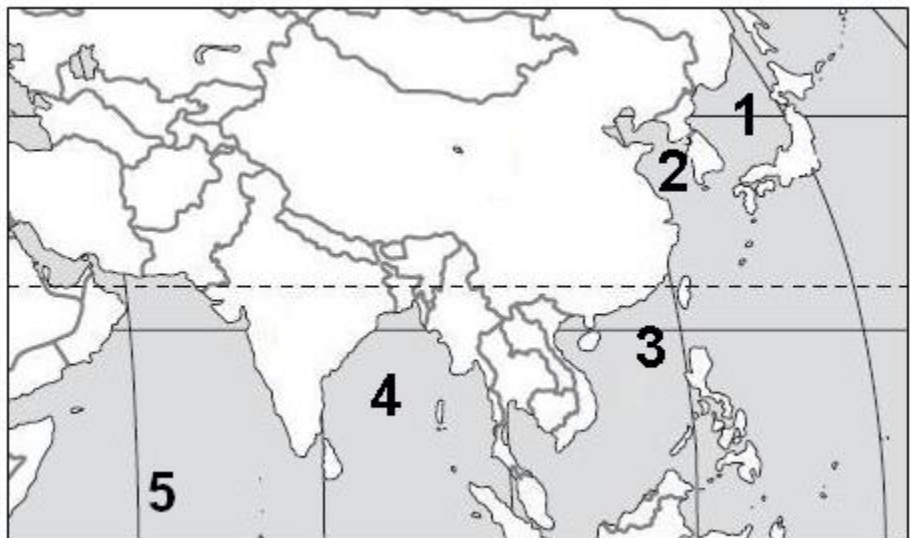
1. Identify the five rivers of Southern & Eastern Asia numbered in the diagram to the right. (SS7G9a)



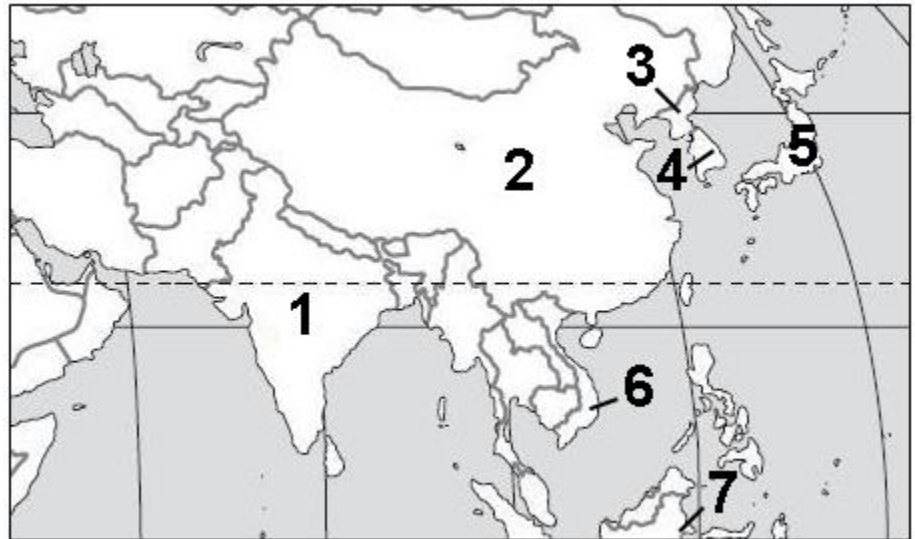
2. Identify the four physical features of Southern & Eastern Asia numbered in the diagram to the right. (SS7G9a)



3. Identify the four physical features of Southern & Eastern Asia numbered in the diagram to the right. (SS7G9a)



4. Identify the nations of Southern & Eastern Asia numbered in the diagram to the right. (SS7G9b)



- 
5. What are the two major rivers that have origins in the Himalayan Mountains? (SS7G9a)
  
  6. Which physical feature of Southern & Eastern Asia is located between the Korean peninsula and Japan? (SS7G9a)
  
  7. Which major physical feature of Southern & Eastern Asia is located in northwestern China between two mountain ranges? (SS7G9a)
  
  8. Which major ocean is located to the south of Asia? (SS7G9a)
  
  9. Describe the cultural and environmental importance of the Ganges River. (SS7G10a)
  
  10. Describe how the pollution of the Yangtze River affects the people in its surrounding area. (SS7G10a)
  
  11. What human factor has an impact on the flooding of the Yangtze River? (SS7G10b)
  
  12. What factors have caused an increase in air pollution in China? (SS7G10b)
  
  13. In which two countries do most of the world's population live in Southern & Eastern Asia? (SS7G11a)
  
  14. In which type of area do the majority of people living in China and India choose to live? Why? (SS7G11a)

15. Which country in Southern & Eastern Asia is the world's leading fishing country? Why? (SS7G11)
  
16. Describe the development of Asia's transportation systems. (SS7G11b)
  
17. Define an ethnic group. (SS7G12a)
  
18. Describe the religion of Hinduism. (SS7G12b)
  
19. Describe the religion of Buddhism. (SS7G12b)
  
20. Describe the religion of Islam. (SS7G12b)
  
21. Describe the religion of Shintoism. (SS7G12b)
  
22. Describe the philosophy of Confucianism. (SS7G12b)